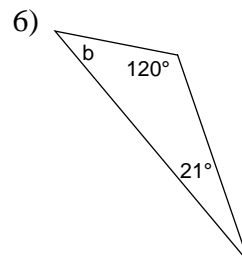
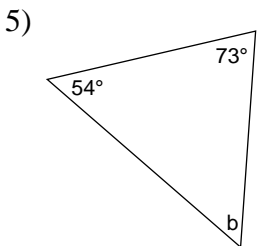
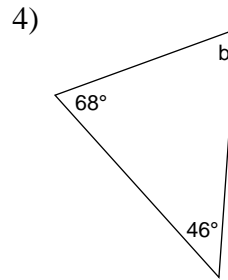
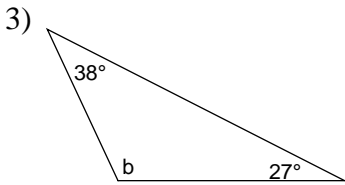
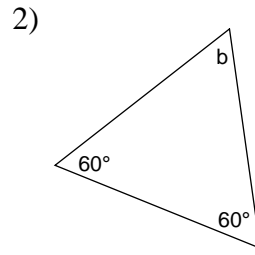
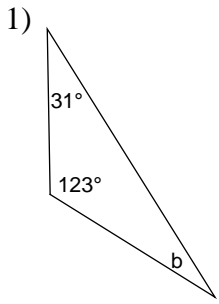
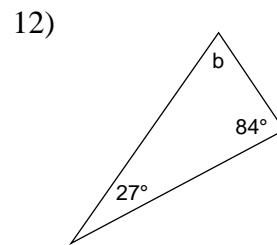
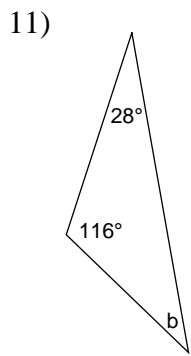
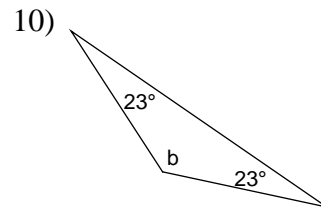
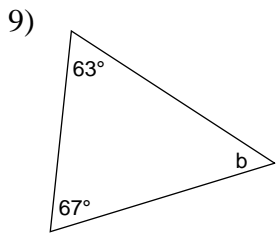
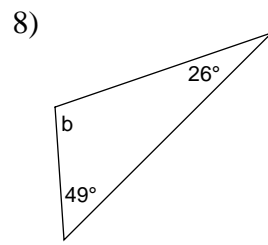
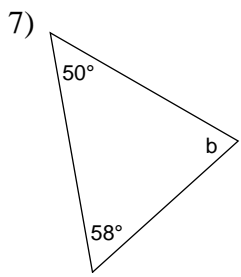


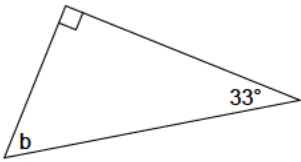
# Triangles - finding angles

Use these angle measures to find each missing angle.

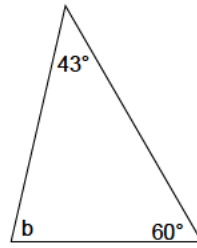




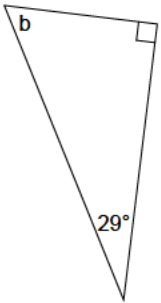
13)



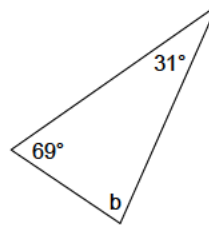
14)



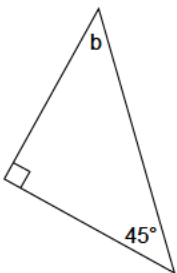
15)



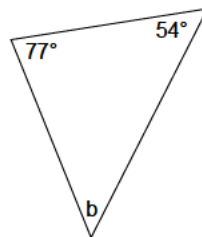
16)



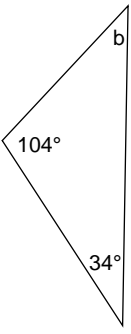
17)



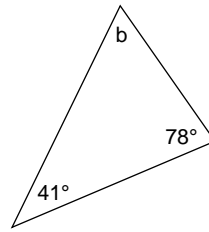
18)



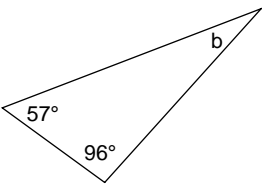
19)



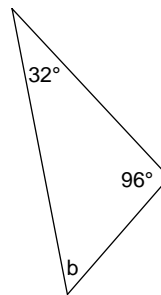
20)



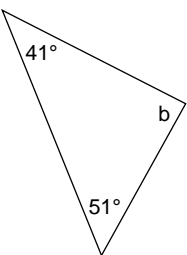
21)



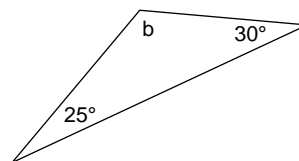
22)



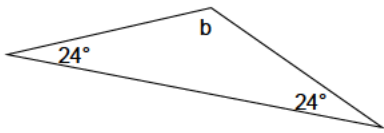
23)



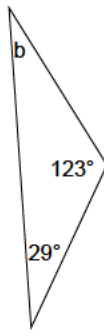
24)



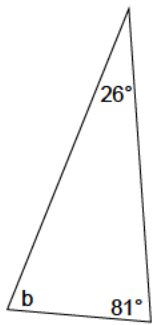
25)



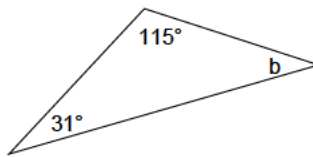
26)



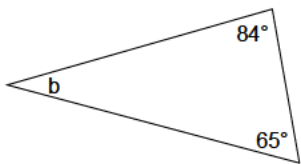
27)



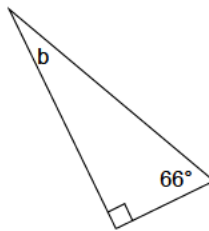
28)



29)



30)



## Answers to Triangles - finding angles

1)  $26^\circ$

5)  $53^\circ$

9)  $50^\circ$

13)  $57^\circ$

17)  $45^\circ$

21)  $27^\circ$

25)  $132^\circ$

29)  $31^\circ$

2)  $60^\circ$

6)  $39^\circ$

10)  $134^\circ$

14)  $77^\circ$

18)  $49^\circ$

22)  $52^\circ$

26)  $28^\circ$

30)  $24^\circ$

3)  $115^\circ$

7)  $72^\circ$

11)  $36^\circ$

15)  $61^\circ$

19)  $42^\circ$

23)  $88^\circ$

27)  $73^\circ$

4)  $66^\circ$

8)  $105^\circ$

12)  $69^\circ$

16)  $80^\circ$

20)  $61^\circ$

24)  $125^\circ$

28)  $34^\circ$