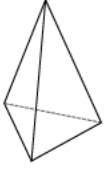


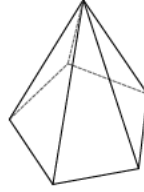
# Solid figures - pyramids

Identify each pyramid.

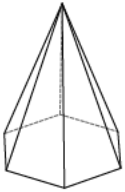
1)



2)



3)



4)



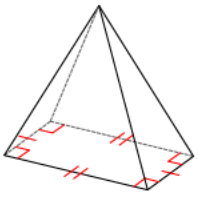
5)



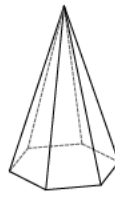
6)



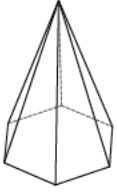
7)



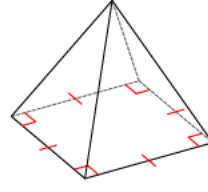
8)



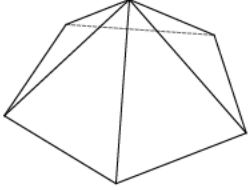
9)



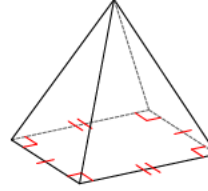
10)



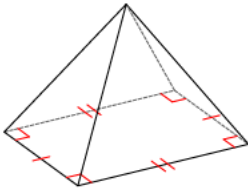
11)



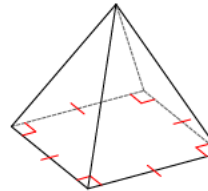
12)



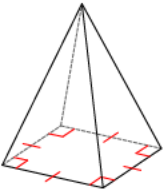
13)



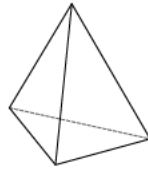
14)



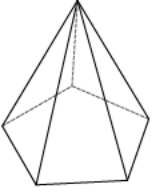
15)



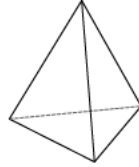
16)



17)



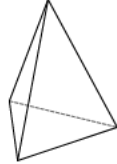
18)



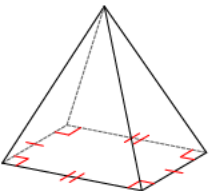
19)



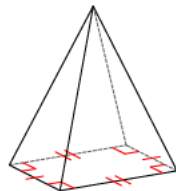
20)



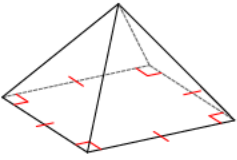
21)



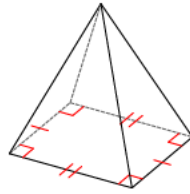
22)



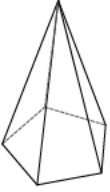
23)



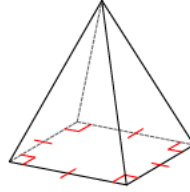
24)



25)



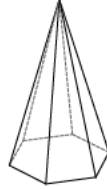
26)



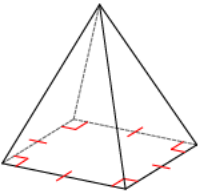
27)



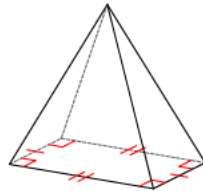
28)



29)



30)



## Answers to Solid figures - pyramids

- |                         |                         |                        |                         |
|-------------------------|-------------------------|------------------------|-------------------------|
| 1) triangular pyramid   | 2) pentagonal pyramid   | 3) hexagonal pyramid   | 4) pentagonal pyramid   |
| 5) pentagonal pyramid   | 6) triangular pyramid   | 7) rectangular pyramid | 8) hexagonal pyramid    |
| 9) hexagonal pyramid    | 10) square pyramid      | 11) pentagonal pyramid | 12) rectangular pyramid |
| 13) rectangular pyramid | 14) square pyramid      | 15) square pyramid     | 16) triangular pyramid  |
| 17) pentagonal pyramid  | 18) triangular pyramid  | 19) pentagonal pyramid | 20) triangular pyramid  |
| 21) rectangular pyramid | 22) rectangular pyramid | 23) square pyramid     | 24) rectangular pyramid |
| 25) pentagonal pyramid  | 26) square pyramid      | 27) pentagonal pyramid | 28) hexagonal pyramid   |
| 29) square pyramid      | 30) rectangular pyramid |                        |                         |