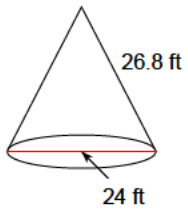


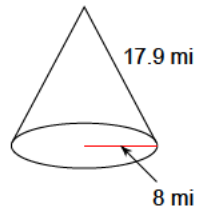
Solid figures - cones

Find the surface area for each given cone.

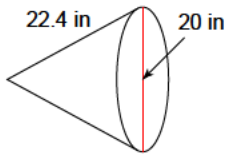
1)



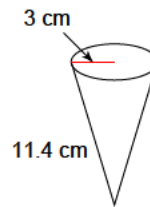
2)



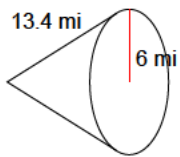
3)



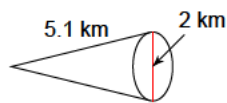
4)



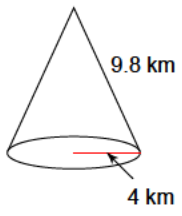
5)



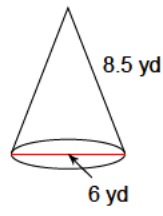
6)



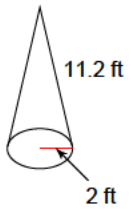
7)



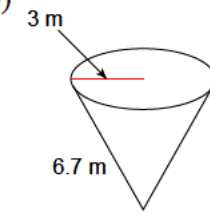
8)



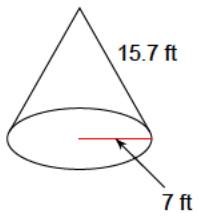
9)



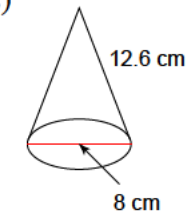
10)



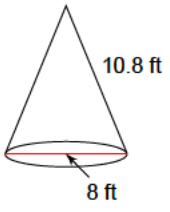
11)



12)



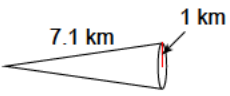
13)



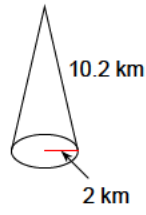
14)



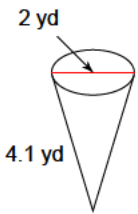
15)



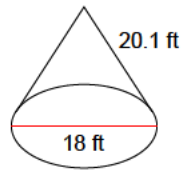
16)

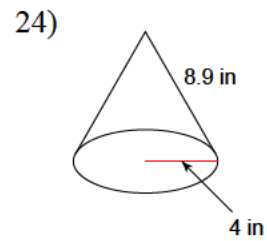
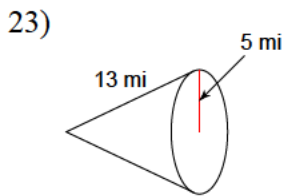
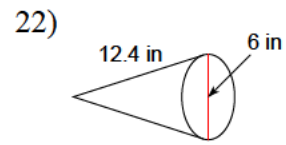
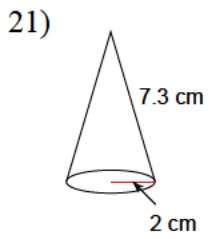
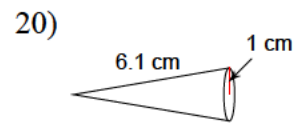
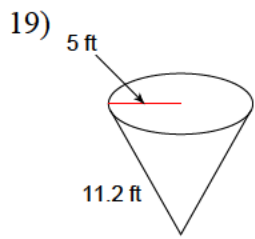


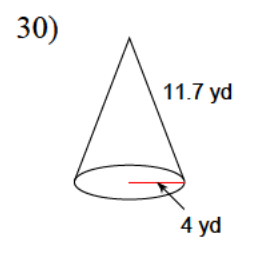
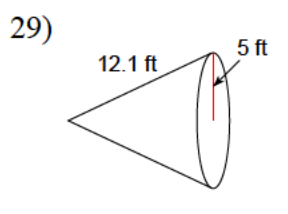
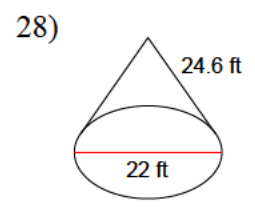
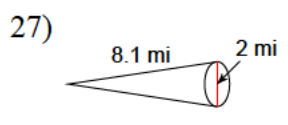
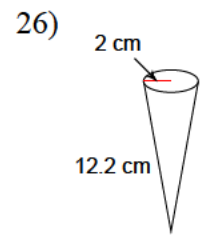
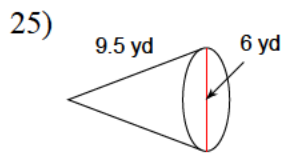
17)



18)







Answers to Solid figures - cones

- | | | | |
|---------------------------|---------------------------|---------------------------|----------------------------|
| 1) 1462.7 ft ² | 2) 650.9 mi ² | 3) 1017.9 in ² | 4) 135.7 cm ² |
| 5) 365.7 mi ² | 6) 19.2 km ² | 7) 173.4 km ² | 8) 108.4 yd ² |
| 9) 82.9 ft ² | 10) 91.4 m ² | 11) 499.2 ft ² | 12) 208.6 cm ² |
| 13) 186 ft ² | 14) 40.8 mi ² | 15) 25.4 km ² | 16) 76.7 km ² |
| 17) 16 yd ² | 18) 822.8 ft ² | 19) 254.5 ft ² | 20) 22.3 cm ² |
| 21) 58.4 cm ² | 22) 145.1 in ² | 23) 282.7 mi ² | 24) 162.1 in ² |
| 25) 117.8 yd ² | 26) 89.2 cm ² | 27) 28.6 mi ² | 28) 1230.2 ft ² |
| 29) 268.6 ft ² | 30) 197.3 yd ² | | |