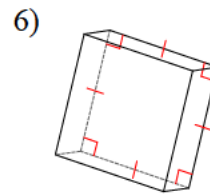
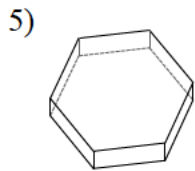
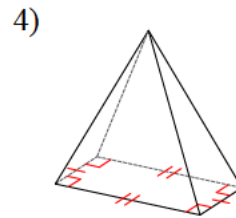
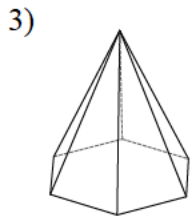
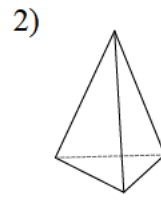
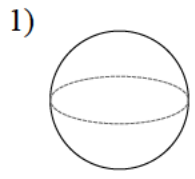
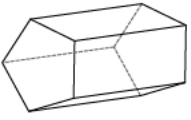


Solid figures - complete

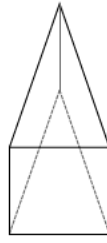
Identify each of the given figures.



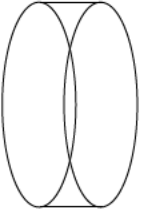
7)



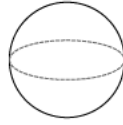
8)



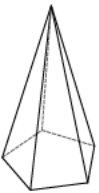
9)



10)



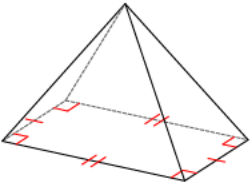
11)



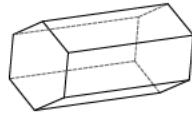
12)



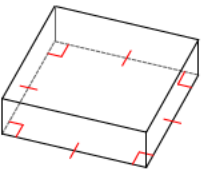
13)



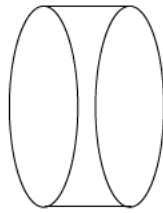
14)



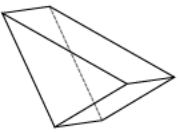
15)



16)



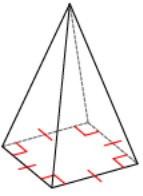
17)



18)



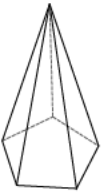
19)



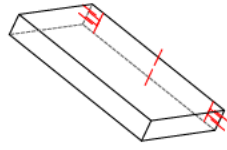
20)



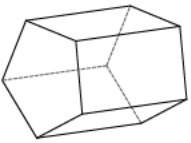
21)



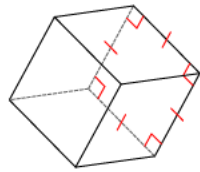
22)



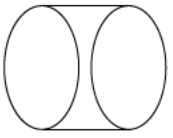
23)



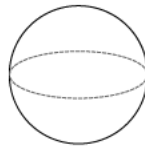
24)



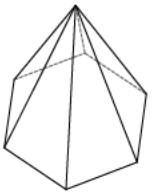
25)



26)



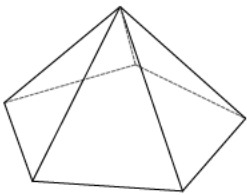
27)



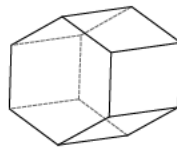
28)



29)



30)



Answers to Solid figures - complete

- | | | | |
|-------------------------|-----------------------|------------------------|------------------------|
| 1) sphere | 2) triangular pyramid | 3) hexagonal pyramid | 4) rectangular pyramid |
| 5) hexagonal prism | 6) square prism | 7) pentagonal prism | 8) triangular prism |
| 9) cylinder | 10) sphere | 11) pentagonal pyramid | 12) triangular pyramid |
| 13) rectangular pyramid | 14) hexagonal prism | 15) square prism | 16) cylinder |
| 17) triangular prism | 18) hexagonal pyramid | 19) square pyramid | 20) hexagonal prism |
| 21) pentagonal pyramid | 22) rectangular prism | 23) pentagonal prism | 24) square prism |
| 25) cylinder | 26) sphere | 27) hexagonal pyramid | 28) triangular pyramid |
| 29) pentagonal pyramid | 30) hexagonal prism | | |