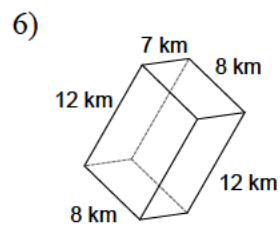
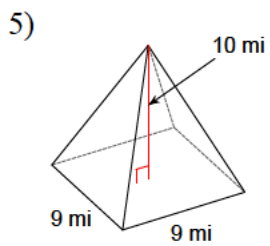
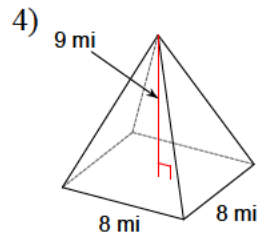
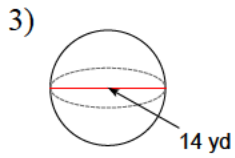
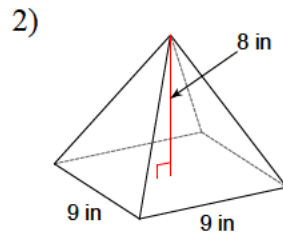
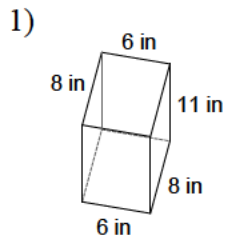
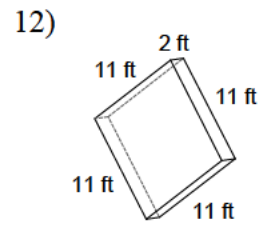
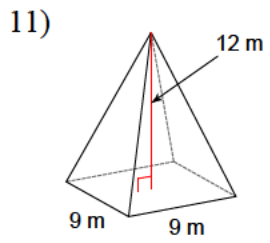
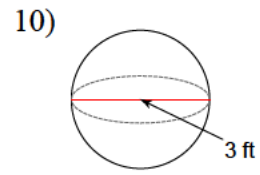
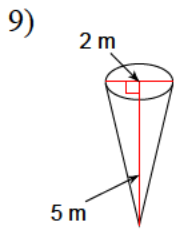
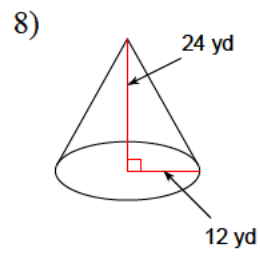
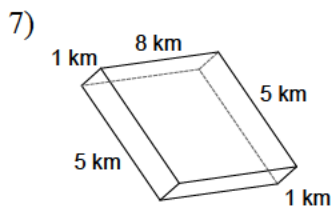


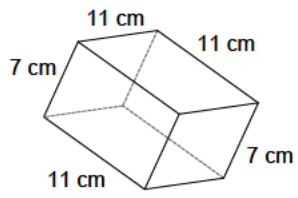
Solid figures - complete

Find the volume of each of the figures, using the information from the diagrams.

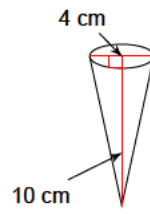




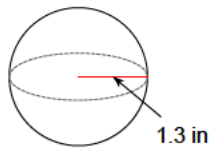
13)



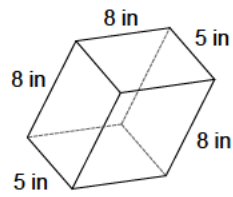
14)



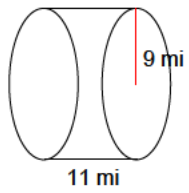
15)



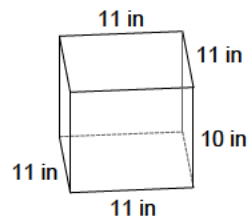
16)



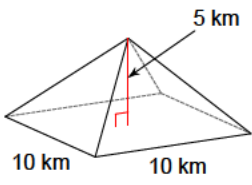
17)



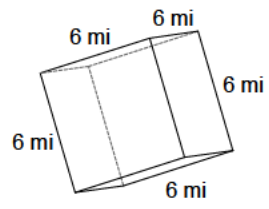
18)



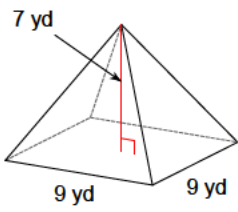
19)



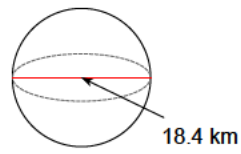
20)



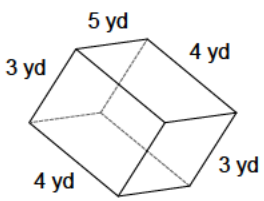
21)



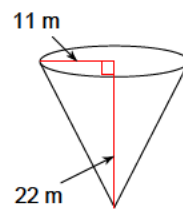
22)

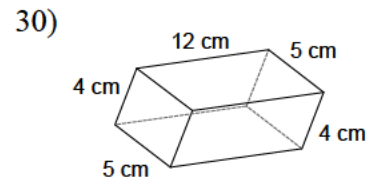
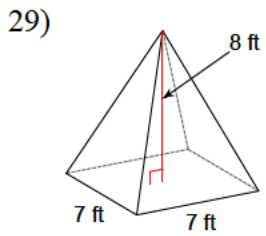
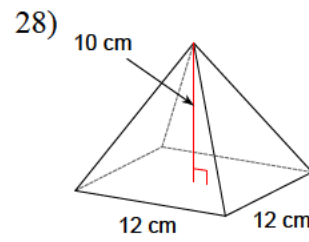
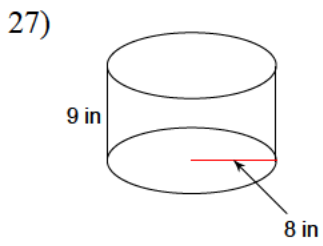
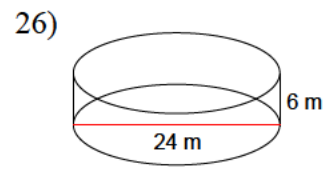
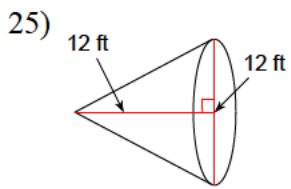


23)



24)





Answers to Solid figures - complete

- | | | | |
|----------------------------|----------------------------|----------------------------|---------------------------|
| 1) 528 in ³ | 2) 216 in ³ | 3) 1436.8 yd ³ | 4) 192 mi ³ |
| 5) 270 mi ³ | 6) 672 km ³ | 7) 40 km ³ | 8) 3619.1 yd ³ |
| 9) 5.2 m ³ | 10) 14.1 ft ³ | 11) 324 m ³ | 12) 242 ft ³ |
| 13) 847 cm ³ | 14) 41.9 cm ³ | 15) 9.2 in ³ | 16) 320 in ³ |
| 17) 2799.2 mi ³ | 18) 1210 in ³ | 19) 166.7 km ³ | 20) 216 mi ³ |
| 21) 189 yd ³ | 22) 3261.8 km ³ | 23) 60 yd ³ | 24) 2787.6 m ³ |
| 25) 452.4 ft ³ | 26) 2714.3 m ³ | 27) 1809.6 in ³ | 28) 480 cm ³ |
| 29) 130.7 ft ³ | 30) 240 cm ³ | | |