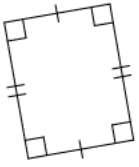


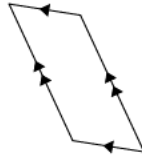
Quadrilaterals

Determine the type of each given quadrilateral.

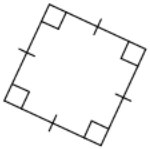
1)



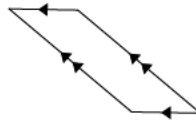
2)



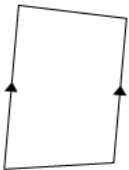
3)



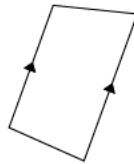
4)



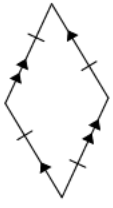
5)



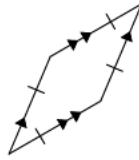
6)



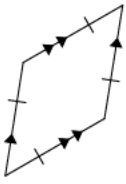
7)



8)



9)



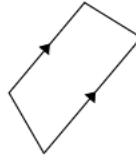
10)



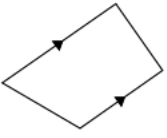
11)



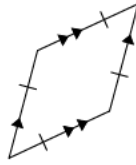
12)



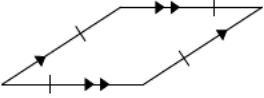
13)



14)



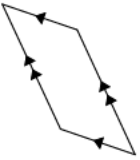
15)



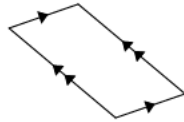
16)



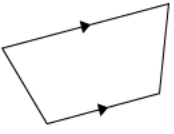
17)



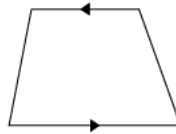
18)



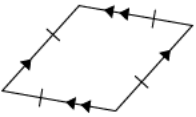
19)



20)



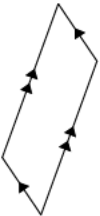
21)



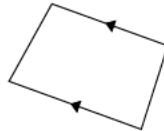
22)



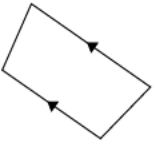
23)



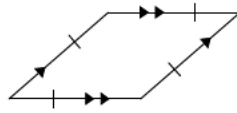
24)



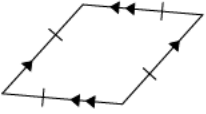
25)



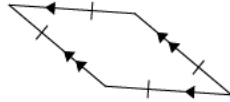
26)



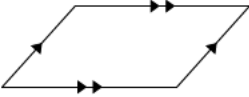
27)



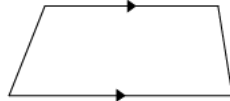
28)



29)



30)



Answers to Quadrilaterals

- | | | | |
|-------------------|-------------------|-------------------|------------------|
| 1) Rectangle | 2) Parallelogram | 3) Square | 4) Parallelogram |
| 5) Trapezoid | 6) Trapezoid | 7) Rhombus | 8) Rhombus |
| 9) Rhombus | 10) Parallelogram | 11) Parallelogram | 12) Trapezoid |
| 13) Trapezoid | 14) Rhombus | 15) Rhombus | 16) Rhombus |
| 17) Parallelogram | 18) Parallelogram | 19) Trapezoid | 20) Trapezoid |
| 21) Rhombus | 22) Parallelogram | 23) Parallelogram | 24) Trapezoid |
| 25) Trapezoid | 26) Rhombus | 27) Rhombus | 28) Rhombus |
| 29) Parallelogram | 30) Trapezoid | | |