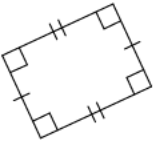


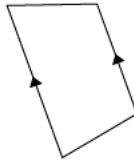
# Quadrilaterals

each given quadrilateral according to its type.

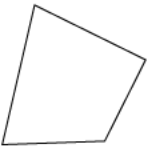
1)



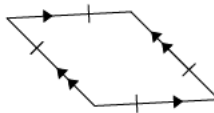
2)



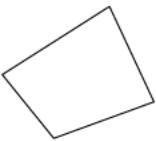
3)



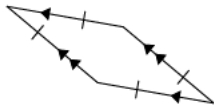
4)

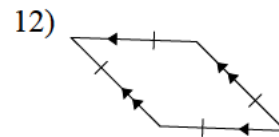
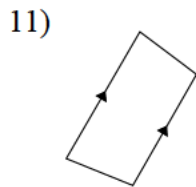
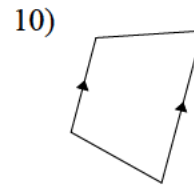
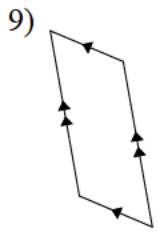
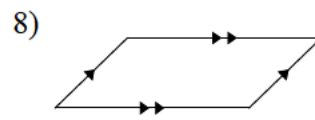
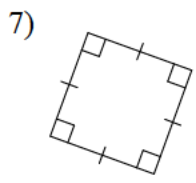


5)

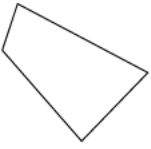


6)

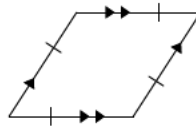




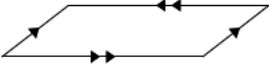
13)



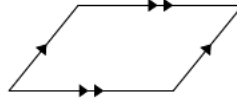
14)



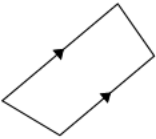
15)



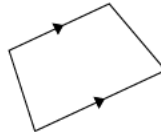
16)



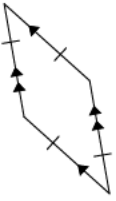
17)



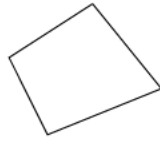
18)



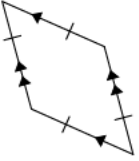
19)



20)



21)



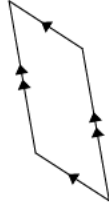
22)



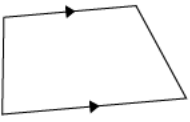
23)



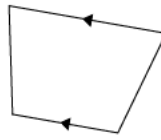
24)



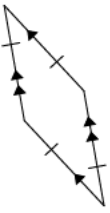
25)



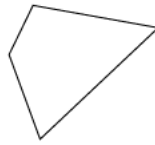
26)



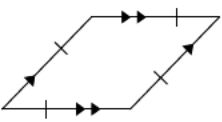
27)



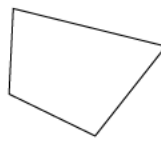
28)



29)



30)



## Answers to Quadrilaterals

- |                   |                   |                   |                   |
|-------------------|-------------------|-------------------|-------------------|
| 1) Rectangle      | 2) Trapezoid      | 3) Quadrilateral  | 4) Rhombus        |
| 5) Quadrilateral  | 6) Rhombus        | 7) Square         | 8) Parallelogram  |
| 9) Parallelogram  | 10) Trapezoid     | 11) Trapezoid     | 12) Rhombus       |
| 13) Quadrilateral | 14) Rhombus       | 15) Parallelogram | 16) Parallelogram |
| 17) Trapezoid     | 18) Trapezoid     | 19) Rhombus       | 20) Quadrilateral |
| 21) Rhombus       | 22) Quadrilateral | 23) Parallelogram | 24) Parallelogram |
| 25) Trapezoid     | 26) Trapezoid     | 27) Rhombus       | 28) Quadrilateral |
| 29) Rhombus       | 30) Quadrilateral |                   |                   |