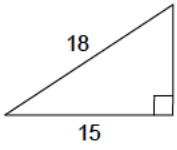


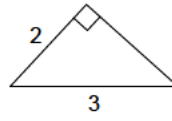
# Pythagorean theorem - integers

Determine the length of the missing leg.

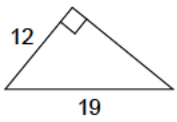
1)



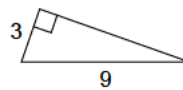
2)



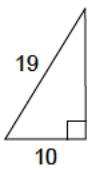
3)



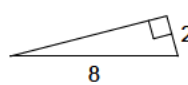
4)



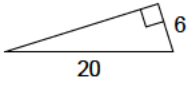
5)



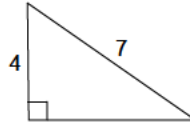
6)



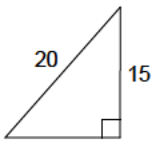
7)



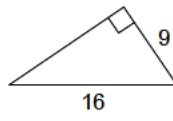
8)



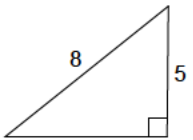
9)



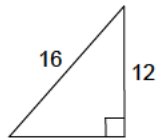
10)



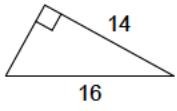
11)



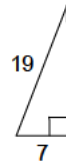
12)



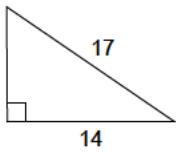
13)



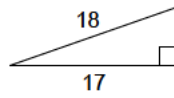
14)



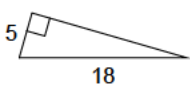
15)



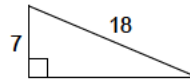
16)



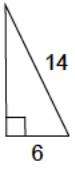
17)



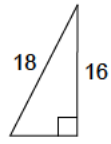
18)



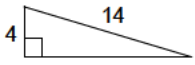
19)



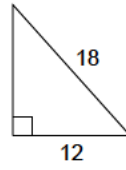
20)



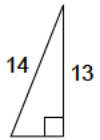
21)



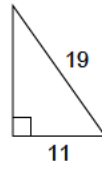
22)



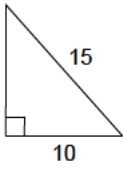
23)



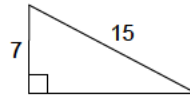
24)



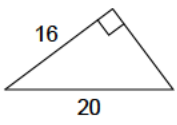
25)



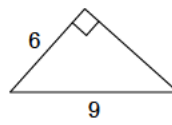
26)



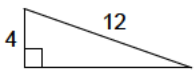
27)



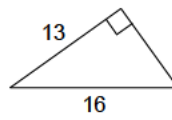
28)



29)



30)



## Answers to Pythagorean theorem - integers

- |          |          |          |          |
|----------|----------|----------|----------|
| 1) 9.9   | 2) 2.2   | 3) 14.7  | 4) 8.5   |
| 5) 16.2  | 6) 7.7   | 7) 19.1  | 8) 5.7   |
| 9) 13.2  | 10) 13.2 | 11) 6.2  | 12) 10.6 |
| 13) 7.7  | 14) 17.7 | 15) 9.6  | 16) 5.9  |
| 17) 17.3 | 18) 16.6 | 19) 12.6 | 20) 8.2  |
| 21) 13.4 | 22) 13.4 | 23) 5.2  | 24) 15.5 |
| 25) 11.2 | 26) 13.3 | 27) 12   | 28) 6.7  |
| 29) 11.3 | 30) 9.3  |          |          |