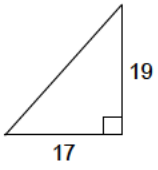


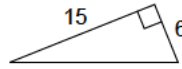
Pythagorean theorem - integers

Calculate the length of the missing hypotenuse.

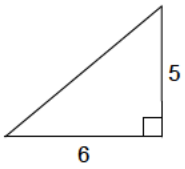
1)



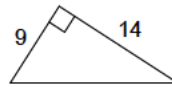
2)



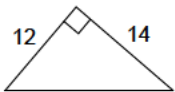
3)



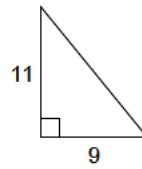
4)



5)



6)



7)



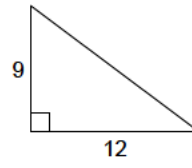
8)



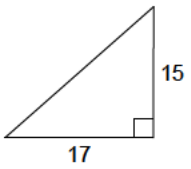
9)



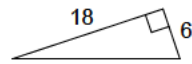
10)



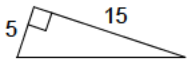
11)



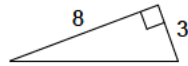
12)



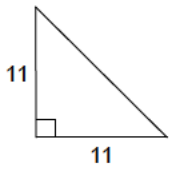
13)



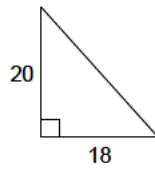
14)



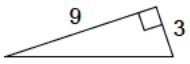
15)



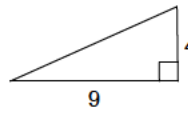
16)



17)



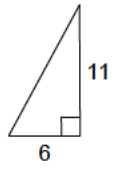
18)



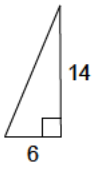
19)



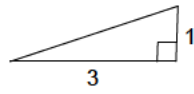
20)



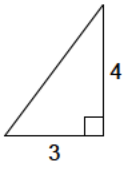
21)



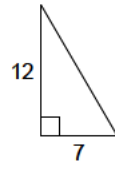
22)



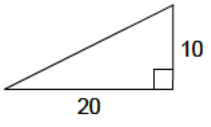
23)



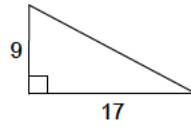
24)



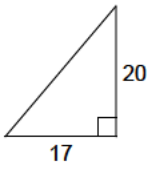
25)



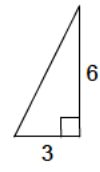
26)



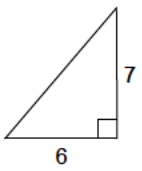
27)



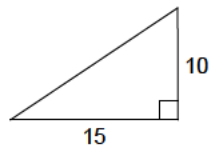
28)



29)



30)



Answers to Pythagorean theorem - integers

- | | | | |
|----------|----------|----------|----------|
| 1) 25.5 | 2) 16.2 | 3) 7.8 | 4) 16.6 |
| 5) 18.4 | 6) 14.2 | 7) 21.1 | 8) 19.9 |
| 9) 12 | 10) 15 | 11) 22.7 | 12) 19 |
| 13) 15.8 | 14) 8.5 | 15) 15.6 | 16) 26.9 |
| 17) 9.5 | 18) 9.8 | 19) 18.4 | 20) 12.5 |
| 21) 15.2 | 22) 3.2 | 23) 5 | 24) 13.9 |
| 25) 22.4 | 26) 19.2 | 27) 26.2 | 28) 6.7 |
| 29) 9.2 | 30) 18 | | |