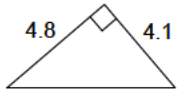


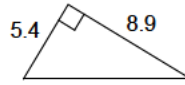
Pythagorean theorem - decimals

Calculate the length of the missing side and round it to the nearest tenth.

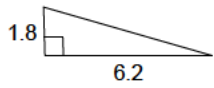
1)



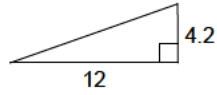
2)



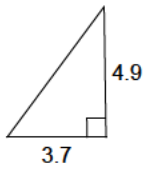
3)



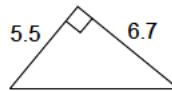
4)



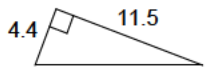
5)



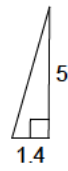
6)



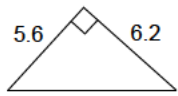
7)



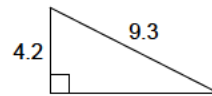
8)



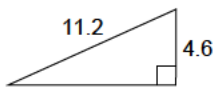
9)



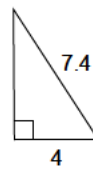
10)



11)



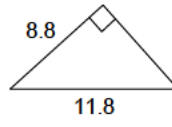
12)



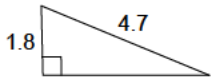
13)



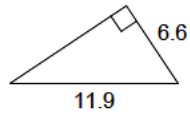
14)



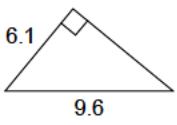
15)



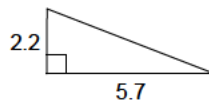
16)



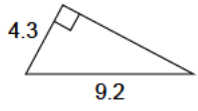
17)



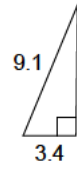
18)



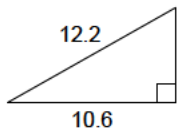
19)



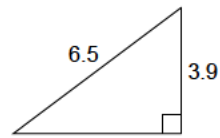
20)



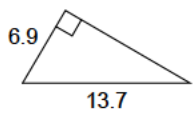
21)



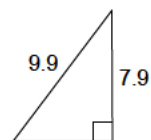
22)



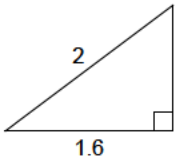
23)



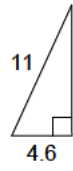
24)



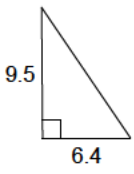
25)



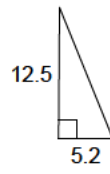
26)



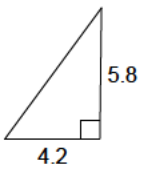
27)



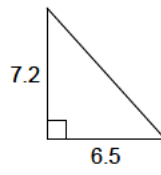
28)



29)



30)



Answers to Pythagorean theorem - decimals

- | | | | |
|---------|---------|----------|----------|
| 1) 6.3 | 2) 10.4 | 3) 6.5 | 4) 12.7 |
| 5) 6.1 | 6) 8.7 | 7) 12.3 | 8) 5.2 |
| 9) 8.4 | 10) 8.3 | 11) 10.2 | 12) 6.2 |
| 13) 9.3 | 14) 7.9 | 15) 4.3 | 16) 9.9 |
| 17) 7.4 | 18) 6.1 | 19) 8.1 | 20) 8.4 |
| 21) 6 | 22) 5.2 | 23) 11.8 | 24) 6 |
| 25) 1.2 | 26) 10 | 27) 11.5 | 28) 13.5 |
| 29) 7.2 | 30) 9.7 | | |