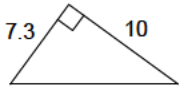


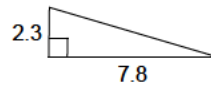
Pythagorean theorem - decimals

Calculate the length of the missing hypotenuse. Round it to the nearest tenth.

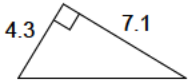
1)



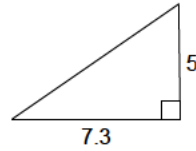
2)



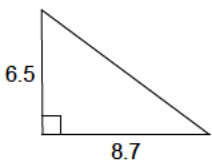
3)



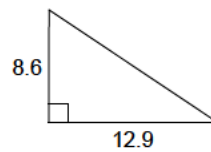
4)



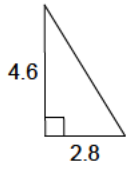
5)



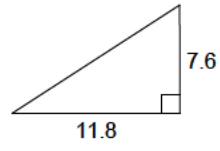
6)



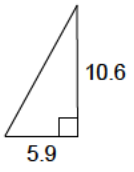
7)



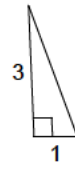
8)



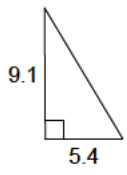
9)



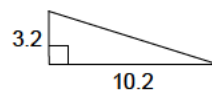
10)



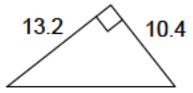
11)



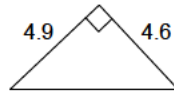
12)



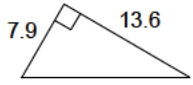
13)



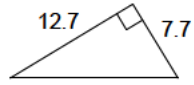
14)



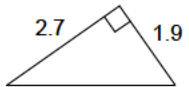
15)



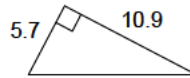
16)



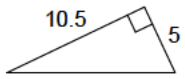
17)



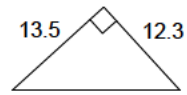
18)



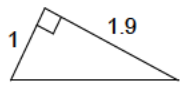
19)



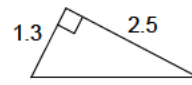
20)



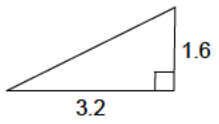
21)



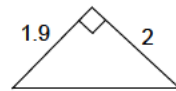
22)



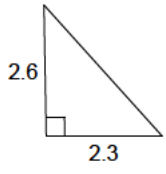
23)



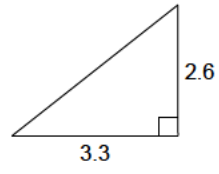
24)



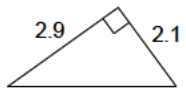
25)



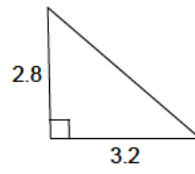
26)



27)



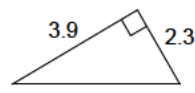
28)



29)



30)



Answers to Pythagorean theorem - decimals

1) 12.4
5) 10.9
9) 12.1
13) 16.8
17) 3.3
21) 2.1
25) 3.5
29) 5

2) 8.1
6) 15.5
10) 3.2
14) 6.7
18) 12.3
22) 2.8
26) 4.2
30) 4.5

3) 8.3
7) 5.4
11) 10.6
15) 15.7
19) 11.6
23) 3.6
27) 3.6

4) 8.8
8) 14
12) 10.7
16) 14.9
20) 18.3
24) 2.8
28) 4.3