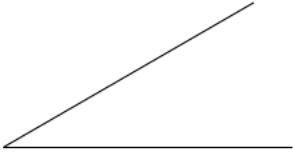
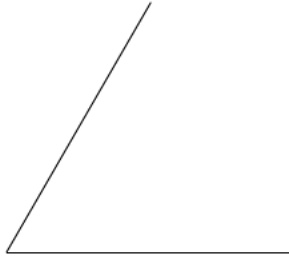


Measure each of the angels to the nearest degree.

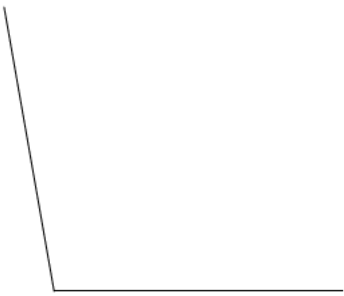
1)



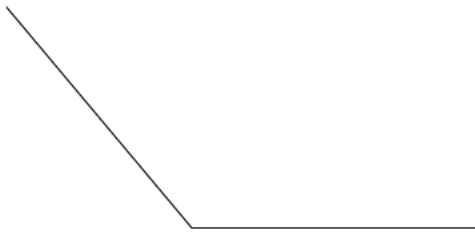
2)



3)



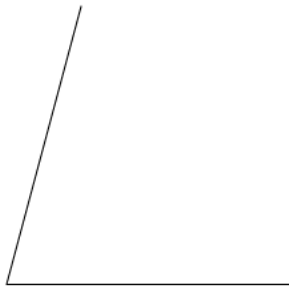
4)




5)



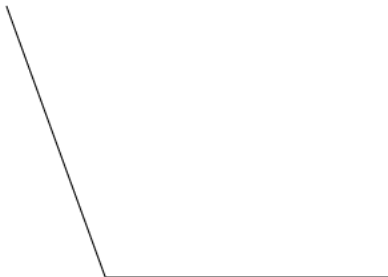
6)



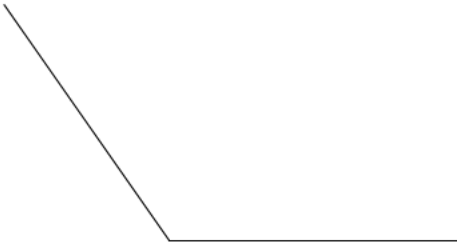
7)



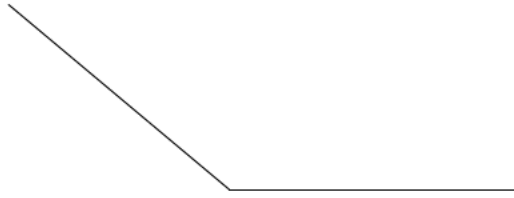
8)



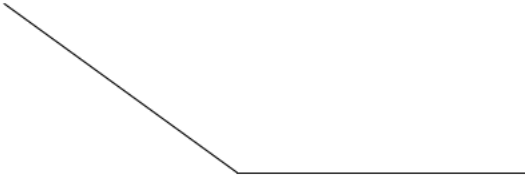
9)



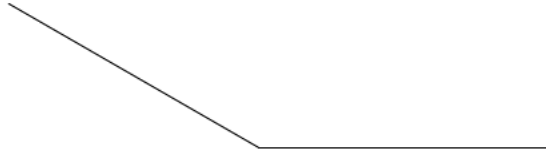
10)



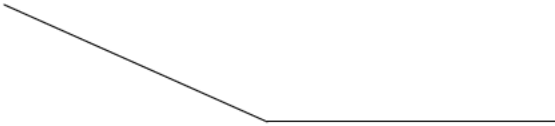
11)



12)



13)



14)



15)



**Draw the angle according to the given measures.**

16)  $160^\circ$

17)  $10^\circ$



18)  $50^\circ$



19)  $80^\circ$



20)  $110^\circ$



21)  $145^\circ$



22)  $160^\circ$



23)  $180^\circ$



24)  $25^\circ$



25)  $40^\circ$



26)  $74^\circ$

27)  $80^\circ$



28)  $86^\circ$

29)  $94^\circ$



30)  $100^\circ$



- 1)  $30^\circ$
- 5)  $160^\circ$
- 9)  $125^\circ$
- 13)  $156^\circ$
- 16)

- 2)  $60^\circ$
- 6)  $75^\circ$
- 10)  $140^\circ$
- 14)  $164^\circ$

- 3)  $100^\circ$
- 7)  $95^\circ$
- 11)  $144^\circ$
- 15)  $170^\circ$

- 4)  $130^\circ$
- 8)  $110^\circ$
- 12)  $150^\circ$

