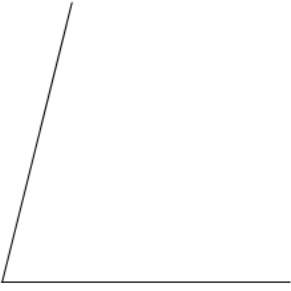



Measure each angle to the nearest degree.

1)




2)



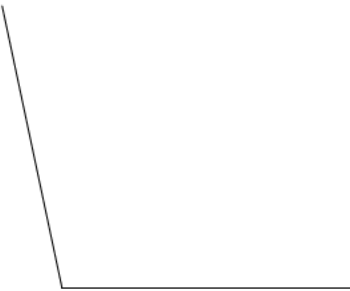
3)



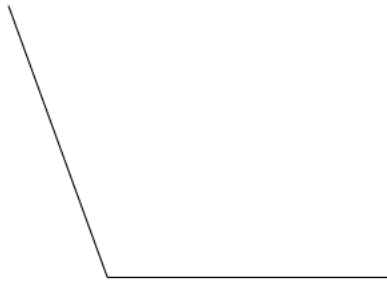
4)



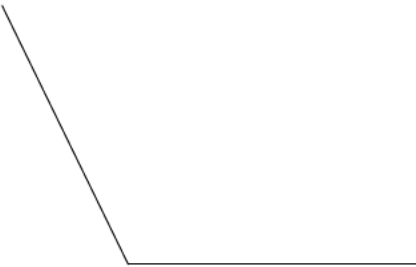
5)



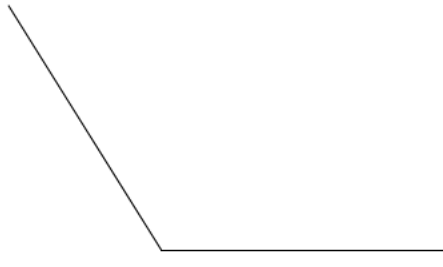
6)



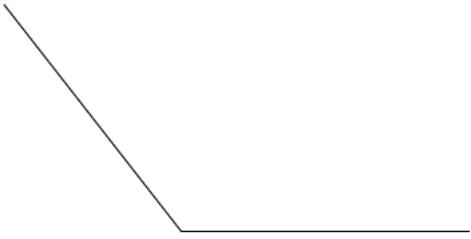
7)



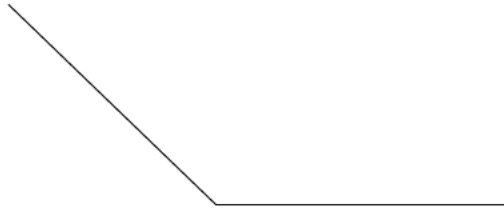
8)



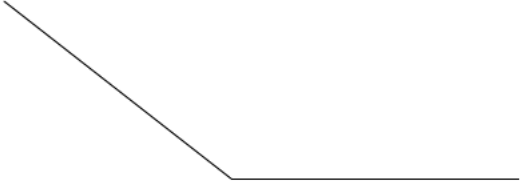
9)



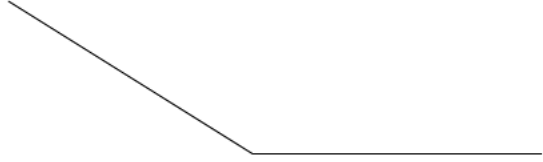
10)



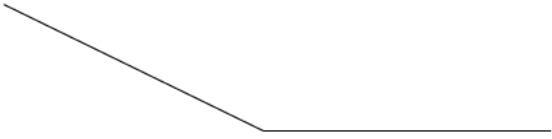
11)



12)



13)



14)



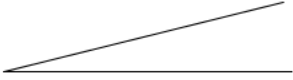
15)



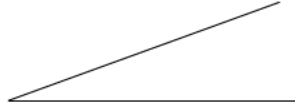
16)



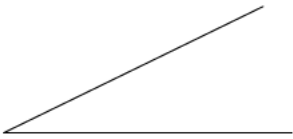
17)



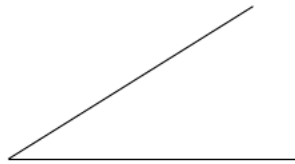
18)



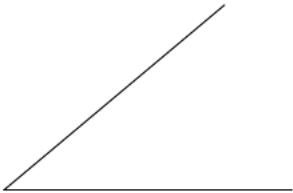
19)



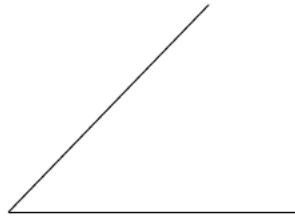
20)



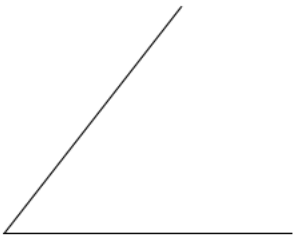
21)



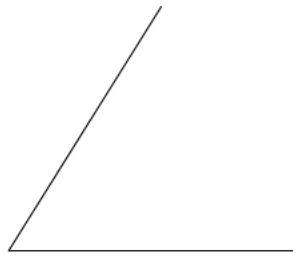
22)



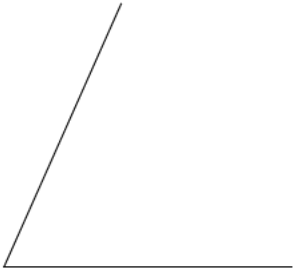
23)



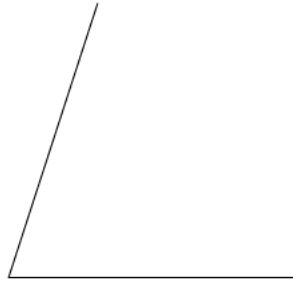
24)



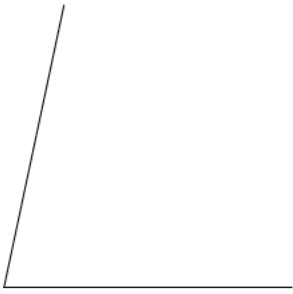
25)




26)



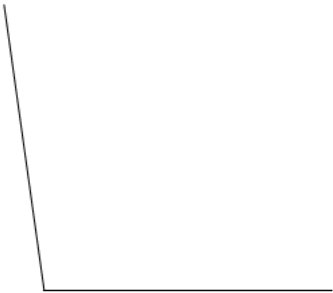
27)



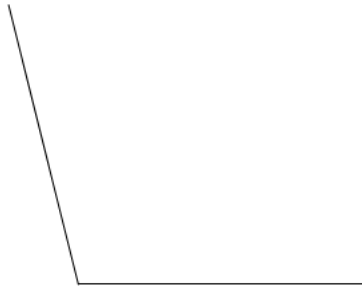
28)



29)



30)



- 1) 76°
- 5) 102°
- 9) 128°
- 13) 154°
- 17) 14°
- 21) 40°
- 25) 66°
- 29) 98°

- 2) 84°
- 6) 110°
- 10) 136°
- 14) 162°
- 18) 20°
- 22) 46°
- 26) 72°
- 30) 104°

- 3) 90°
- 7) 116°
- 11) 142°
- 15) 168°
- 19) 26°
- 23) 52°
- 27) 78°

- 4) 96°
- 8) 122°
- 12) 148°
- 16) 174°
- 20) 32°
- 24) 58°
- 28) 92°