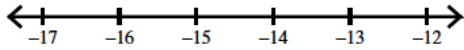
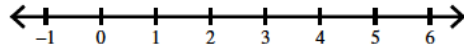


Solve each inequality and graph its solution.

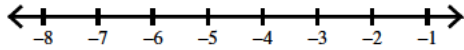
1) $-3 - k \geq 12$



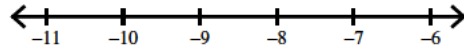
2) $-11 + n < -7$



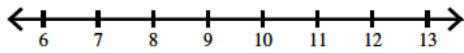
3) $9 < x + 12$



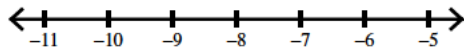
4) $p - 5 \geq -14$



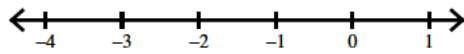
5) $-4 - m \leq -15$



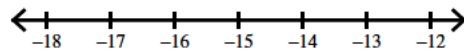
6) $x - 12 > -19$




7) $n + 12 > 11$



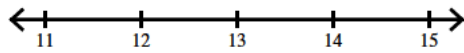
8) $-19 \leq r - 5$



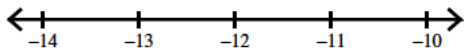
9) $2 \geq -4 + b$



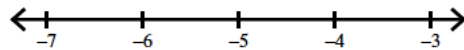
10) $10 \geq v - 3$



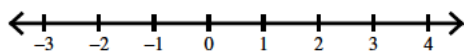
11) $x - 11 < -23$



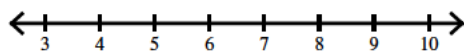
12) $-17 < n - 12$



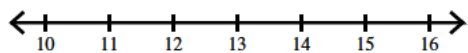
13) $-2 < -4 + a$



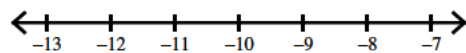
14) $k + 3 \leq 11$



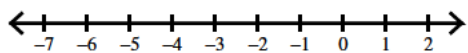
15) $p - 11 \leq 3$



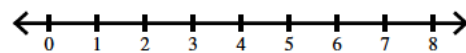
16) $-4 > -13 - x$



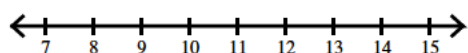
17) $-2 > -5 - n$



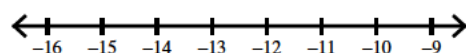
18) $3 + m \geq 6$



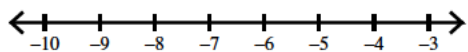
19) $20 \geq r + 10$



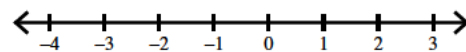
20) $-13 - x < 1$



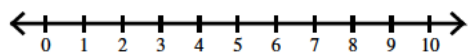
21) $-6 - n < 2$



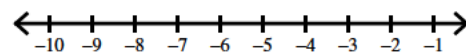
22) $-4 \leq b - 2$



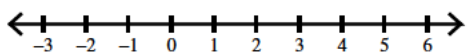
23) $14 \leq r + 9$



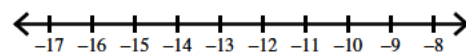
24) $-8 > a - 2$



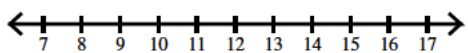
25) $10 \geq v + 9$



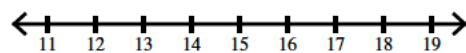
26) $-6 - n > 7$



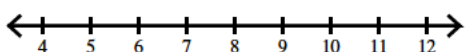
27) $x + 13 \leq 25$



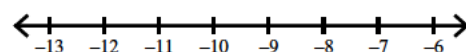
28) $7 < -7 + x$



29) $-14 + x \geq -7$

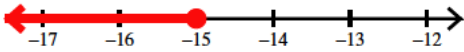


30) $n - 1 < -12$




Solve each inequality and graph its solution.

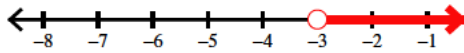
1) $-3 - k \geq 12$




2) $-11 + n < -7$



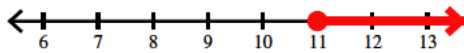
3) $9 < x + 12$



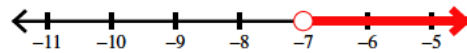
4) $p - 5 \geq -14$



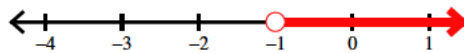
5) $-4 - m \leq -15$



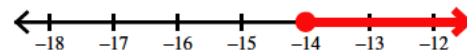
6) $x - 12 > -19$



7) $n + 12 > 11$



8) $-19 \leq r - 5$



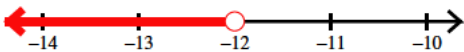
9) $2 \geq -4 + b$



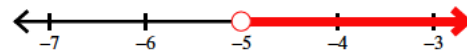
10) $10 \geq v - 3$



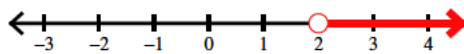
11) $x - 11 < -23$




12) $-17 < n - 12$



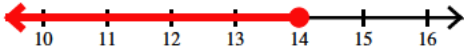
13) $-2 < -4 + a$



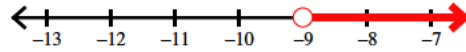
14) $k + 3 \leq 11$



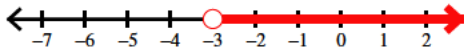
15) $p - 11 \leq 3$




16) $-4 > -13 - x$



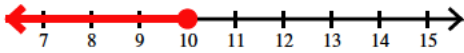
17) $-2 > -5 - n$



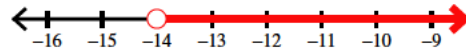
18) $3 + m \geq 6$



19) $20 \geq r + 10$




20) $-13 - x < 1$



21) $-6 - n < 2$



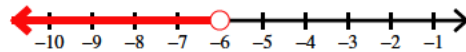
22) $-4 \leq b - 2$



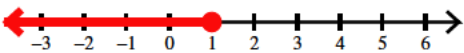
23) $14 \leq r + 9$



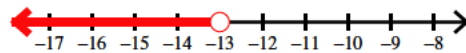
24) $-8 > a - 2$



25) $10 \geq v + 9$



26) $-6 - n > 7$




27) $x + 13 \leq 25$



28) $7 < -7 + x$



29) $-14 + x \geq -7$



30) $n - 1 < -12$

