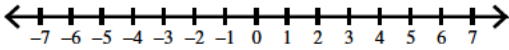
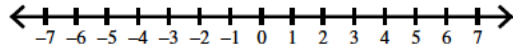


Draw a graph for each inequality.

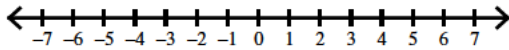
1)  $4 \leq -k$



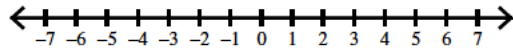
2)  $-6 > -x$



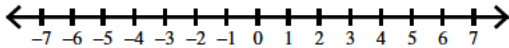
3)  $1 \geq b$



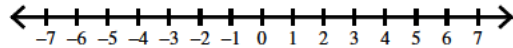
4)  $-3 > -x$



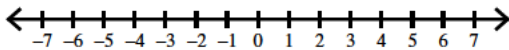
5)  $4 \geq m$



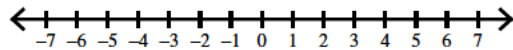
6)  $-6 \geq x$



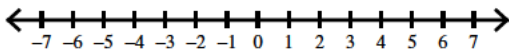
7)  $1 < -a$



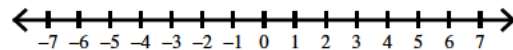
8)  $-3 < x$



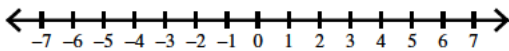
9)  $-6 \leq -p$



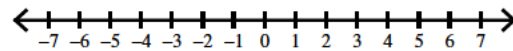
10)  $1 > n$



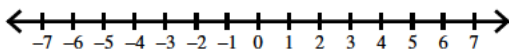
11)  $-3 \leq -n$



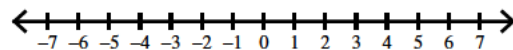
12)  $4 > r$



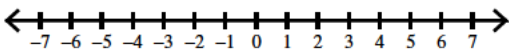
13)  $-2 \geq n$



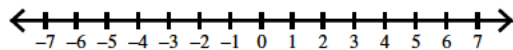
14)  $1 \geq -n$



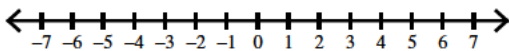
15)  $4 < -v$



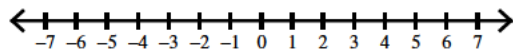
16)  $-6 < -v$



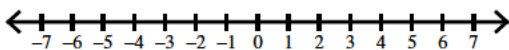
17)  $1 \leq m$



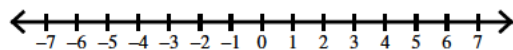
18)  $-2 \leq -x$



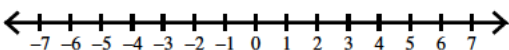
19)  $4 \leq m$



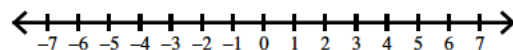
20)  $-6 > x$



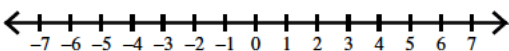
21)  $-2 > -x$



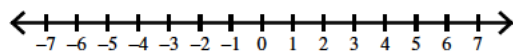
22)  $4 \geq -b$



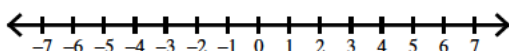
23)  $-6 \geq -x$



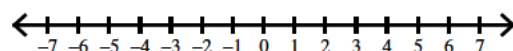
24)  $-2 < x$



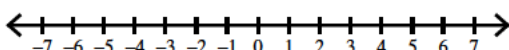
25)  $1 < a$



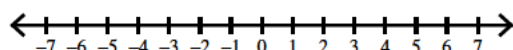
26)  $-5 \leq p$



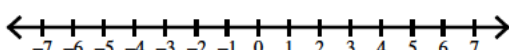
27)  $1 > -n$



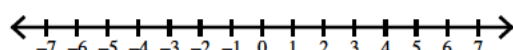
28)  $4 > -v$



29)  $-5 \geq -r$

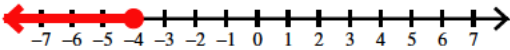


30)  $4 < k$




Draw a graph for each inequality.


1)  $4 \leq -k$



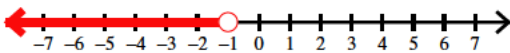
3)  $1 \geq b$




5)  $4 \geq m$




7)  $1 < -a$



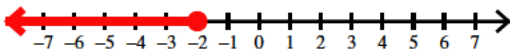
9)  $-6 \leq -p$



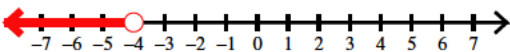
11)  $-3 \leq -n$



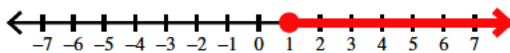
13)  $-2 \geq n$



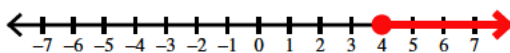
15)  $4 < -v$



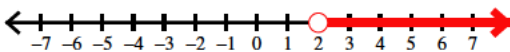
17)  $1 \leq m$



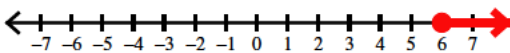
19)  $4 \leq m$



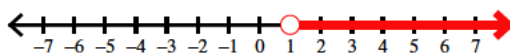
21)  $-2 > -x$



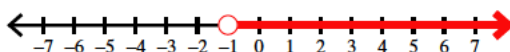
23)  $-6 \geq -x$



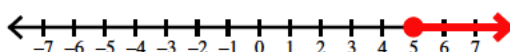
25)  $1 < a$



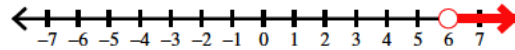
27)  $1 > -n$



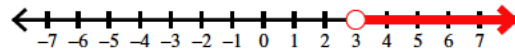
29)  $-5 \geq -r$



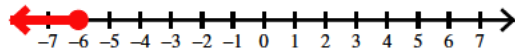
2)  $-6 > -x$



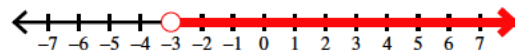
4)  $-3 > -x$




6)  $-6 \geq x$




8)  $-3 < x$



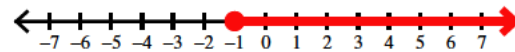
10)  $1 > n$




12)  $4 > r$




14)  $1 \geq -n$



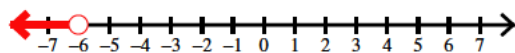
16)  $-6 < -v$




18)  $-2 \leq -x$




20)  $-6 > x$



22)  $4 \geq -b$



24)  $-2 < x$



26)  $-5 \leq p$



28)  $4 > -v$



30)  $4 < k$

