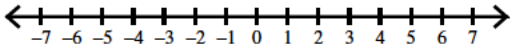
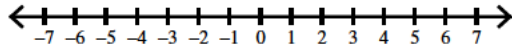


Draw a graph for each inequality.

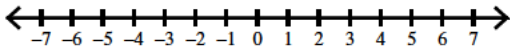
1) $-5 < -k$



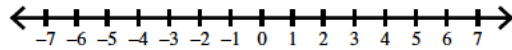
2) $-x \leq -2$



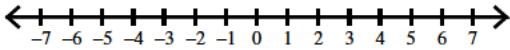
3) $-x \leq 1$



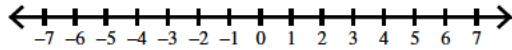
4) $-m > 4$



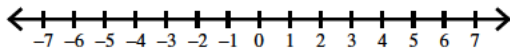
5) $-x > -5$



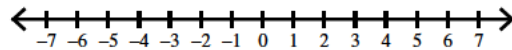
6) $-2 > -x$



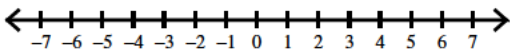
7) $1 \geq -a$



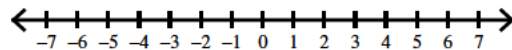
8) $5 \geq -a$



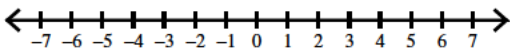
9) $-x < -5$



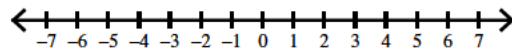
10) $-n < 1$



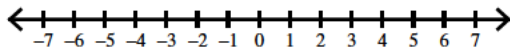
11) $-x < -2$



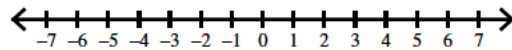
12) $-n \leq 5$



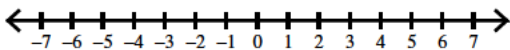
13) $-5 \leq -r$



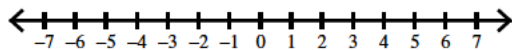
14) $1 > -n$



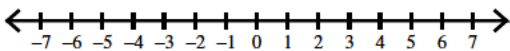
15) $5 > -v$



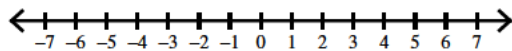
16) $-v \geq -5$



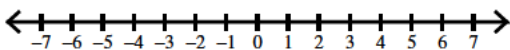
17) $-x \geq -2$



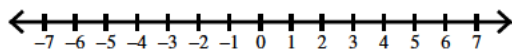
18) $-k < 5$



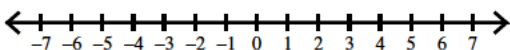
19) $2 \leq -x$



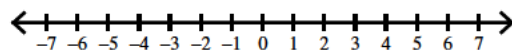
20) $-2 \leq -x$



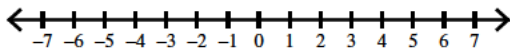
21) $-x > -2$



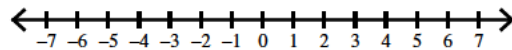
22) $-a \geq 2$



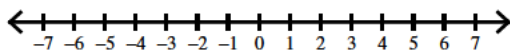
23) $-2 < -p$



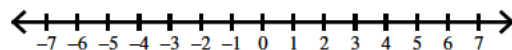
24) $-a \geq 5$



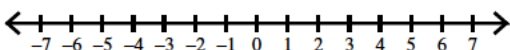
25) $-r \leq -5$



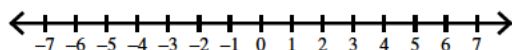
26) $-n > 2$



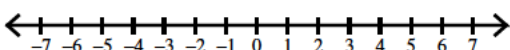
27) $-5 \geq -k$



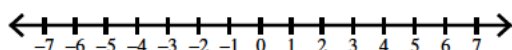
28) $2 < -x$



29) $-2 \geq -x$




30) $-x \leq -1$

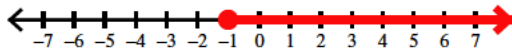


Draw a graph for each inequality.


1) $-5 < -k$



3) $-x \leq 1$



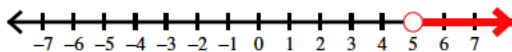
5) $-x > -5$



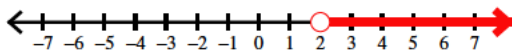
7) $1 \geq -a$




9) $-x < -5$




11) $-x < -2$




13) $-5 \leq -r$



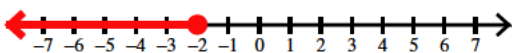
15) $5 > -v$




17) $-x \geq -2$




19) $2 \leq -x$



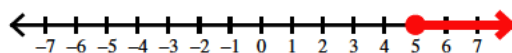
21) $-x > -2$



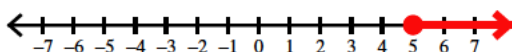
23) $-2 < -p$



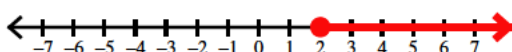
25) $-r \leq -5$



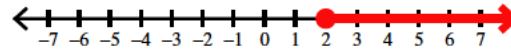
27) $-5 \geq -k$



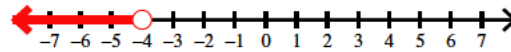
29) $-2 \geq -x$



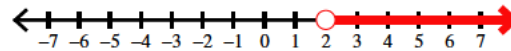
2) $-x \leq -2$




4) $-m > 4$



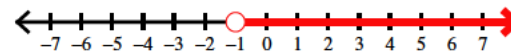
6) $-2 > -x$




8) $5 \geq -a$



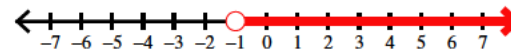
10) $-n < 1$




12) $-n \leq 5$



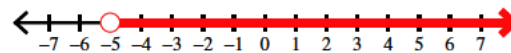
14) $1 > -n$



16) $-v \geq -5$



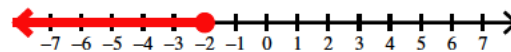
18) $-k < 5$



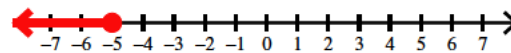
20) $-2 \leq -x$



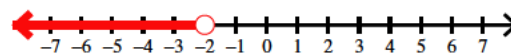
22) $-a \geq 2$



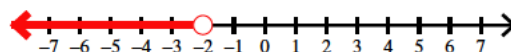
24) $-a \geq 5$



26) $-n > 2$



28) $2 < -x$



30) $-x \leq -1$

