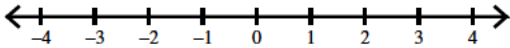
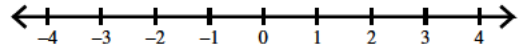


Draw a graph for each inequality.

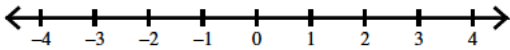
1) $-k < -0.522$



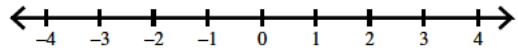
2) $-a > -1.4$



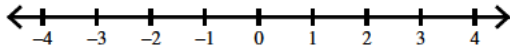
3) $-0.2 > -v$



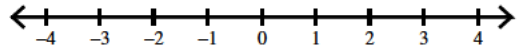
4) $-v \geq 1.2$



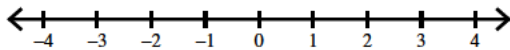
5) $-3 > -n$



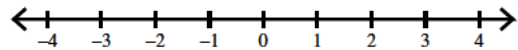
6) $-x \geq 2.4$



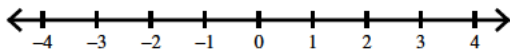
7) $2.6 \geq -n$



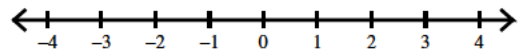
8) $-n \geq -1$



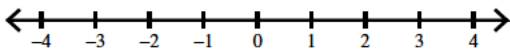
9) $-2.3 \geq -a$



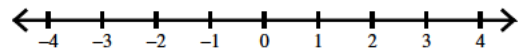
10) $-b \geq -0.9$



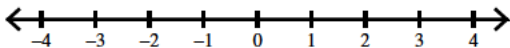
11) $0.3 < -v$



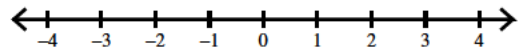
12) $-r < 1.7$



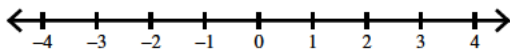
13) $-x < 3$



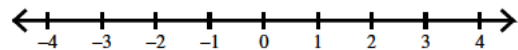
14) $-1.9 < -n$



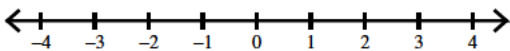
15) $-n \leq -0.5$



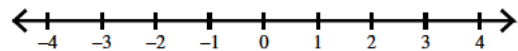
16) $1.6 < -b$



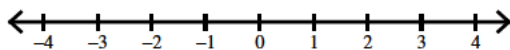
17) $-1.7 < -x$



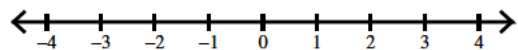
18) $-b \leq 0.7$



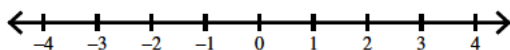
19) $0.9 \leq -r$



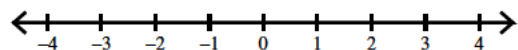
20) $2.1 \leq -m$



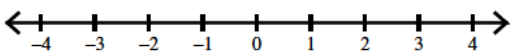
21) $-r \leq -2.7$



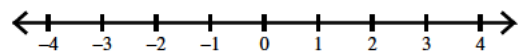
22) $-1.4 > -n$



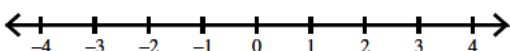
23) $-x > -2.6$



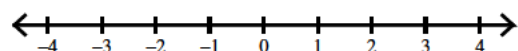
24) $1.9 < -r$



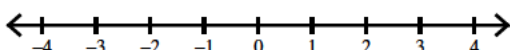
25) $-0.1 > -x$



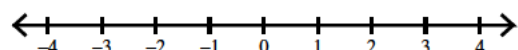
26) $2.5 > -n$



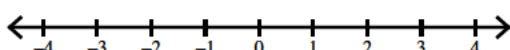
27) $-m > 1.3$



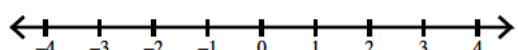
28) $0.37 \leq -n$



29) $2.015 < -n$

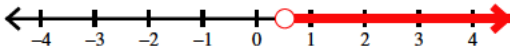


30) $-x \geq -0.08$

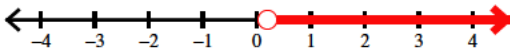


Draw a graph for each inequality.

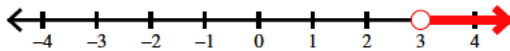
1) $-k < -0.522$



3) $-0.2 > -v$



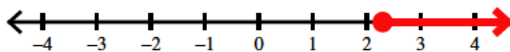
5) $-3 > -n$



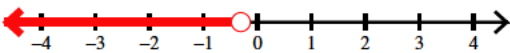
7) $2.6 \geq -n$




9) $-2.3 \geq -a$



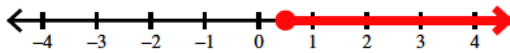
11) $0.3 < -v$



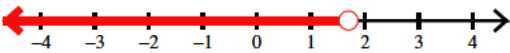
13) $-x < 3$



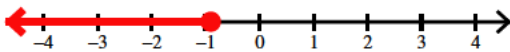
15) $-n \leq -0.5$



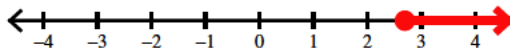
17) $-1.7 < -x$



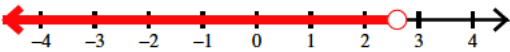
19) $0.9 \leq -r$



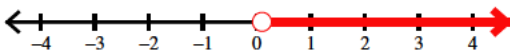
21) $-r \leq -2.7$



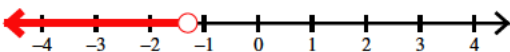
23) $-x > -2.6$



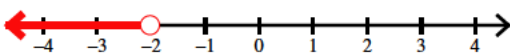
25) $-0.1 > -x$




27) $-m > 1.3$



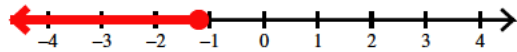
29) $2.015 < -n$



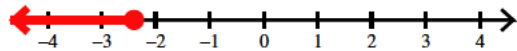
2) $-a > -1.4$



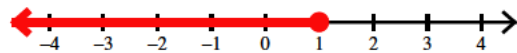
4) $-v \geq 1.2$



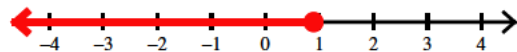
6) $-x \geq 2.4$



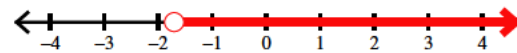
8) $-n \geq -1$



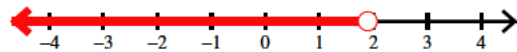
10) $-b \geq -0.9$



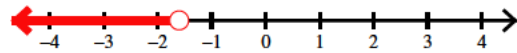
12) $-r < 1.7$



14) $-1.9 < -n$



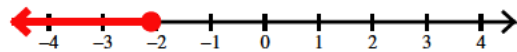
16) $1.6 < -b$



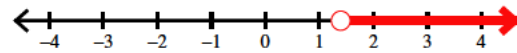
18) $-b \leq 0.7$



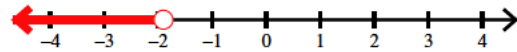
20) $2.1 \leq -m$



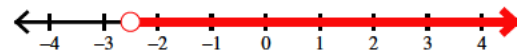
22) $-1.4 > -n$



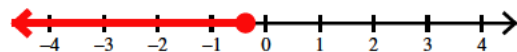
24) $1.9 < -r$



26) $2.5 > -n$



28) $0.37 \leq -n$



30) $-x \geq -0.08$

