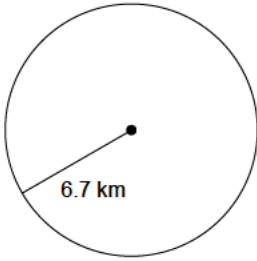
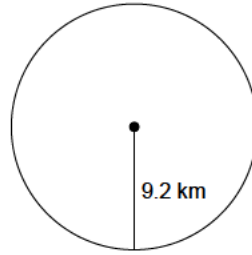


Find the circumference of each given circle. Round your answer to the nearest tenth.

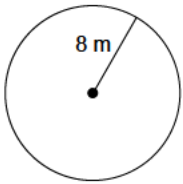
1)



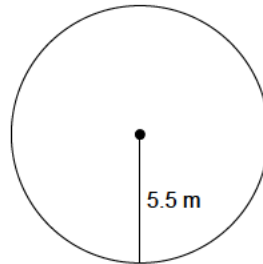
2)



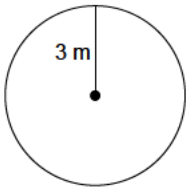
3)



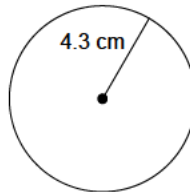
4)



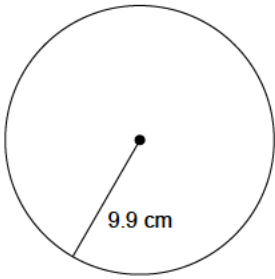
5)



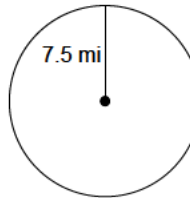
6)



7)



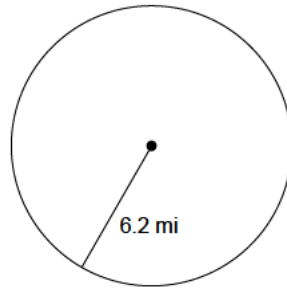
8)



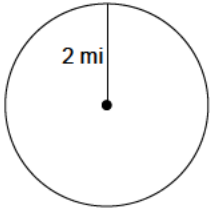
9)



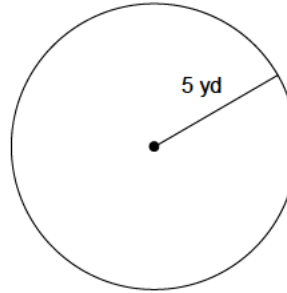
10)



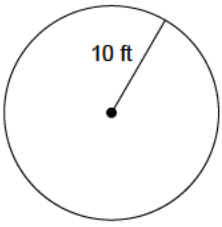
11)



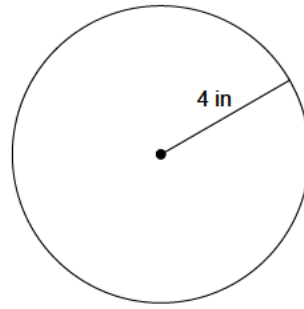
12)



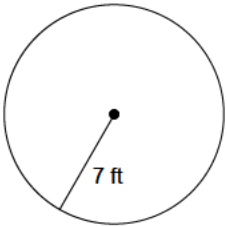
13)



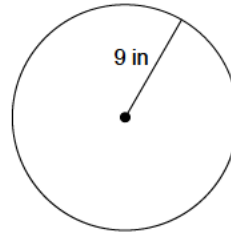
14)



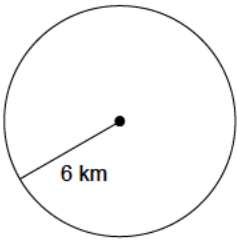
15)



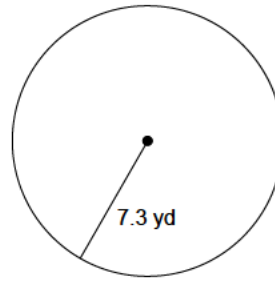
16)



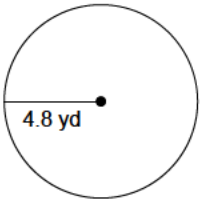
17)



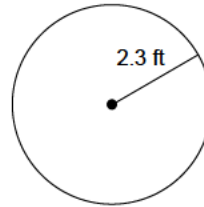
18)



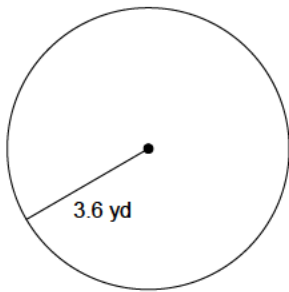
19)



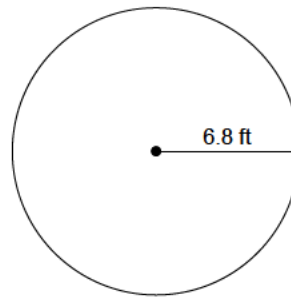
20)



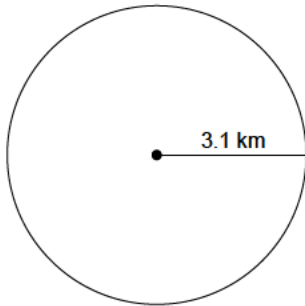
21)



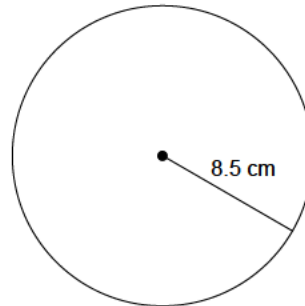
22)



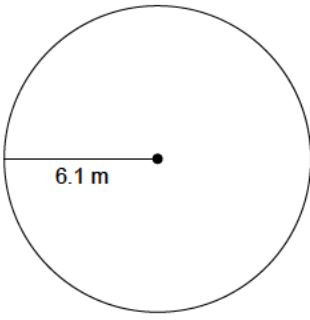
23)



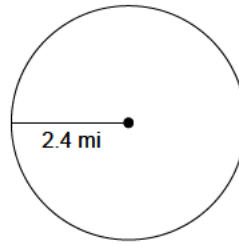
24)



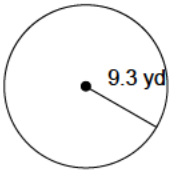
25)



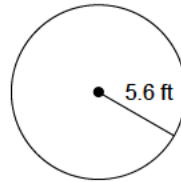
26)



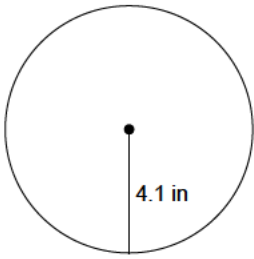
27)



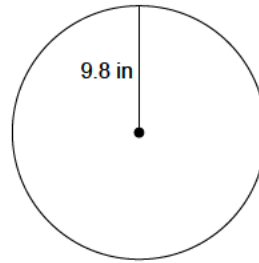
28)



29)



30)





- 1) 42.1 km
- 5) 18.8 m
- 9) 54.7 mi
- 13) 62.8 ft
- 17) 37.7 km
- 21) 22.6 yd
- 25) 38.3 m
- 29) 25.8 in

- 2) 57.8 km
- 6) 27 cm
- 10) 39 mi
- 14) 25.1 in
- 18) 45.9 yd
- 22) 42.7 ft
- 26) 15.1 mi
- 30) 61.6 in

- 3) 50.3 m
- 7) 62.2 cm
- 11) 12.6 mi
- 15) 44 ft
- 19) 30.2 yd
- 23) 19.5 km
- 27) 58.4 yd

- 4) 34.6 m
- 8) 47.1 mi
- 12) 31.4 yd
- 16) 56.5 in
- 20) 14.5 ft
- 24) 53.4 cm
- 28) 35.2 ft