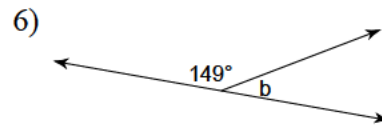
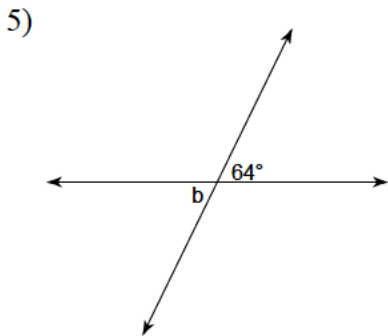
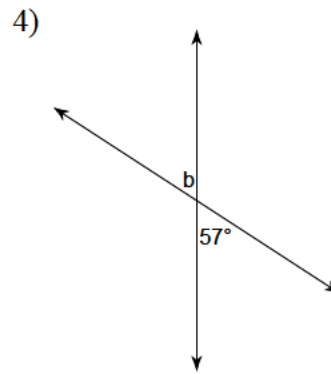
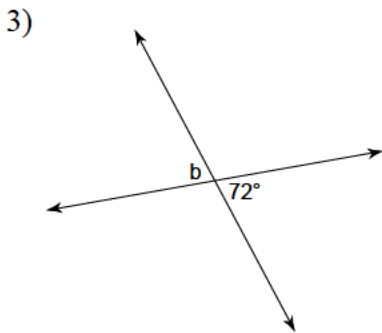
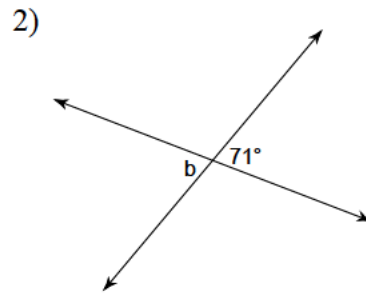
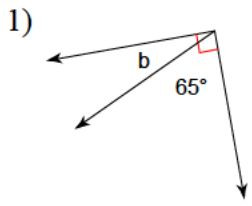
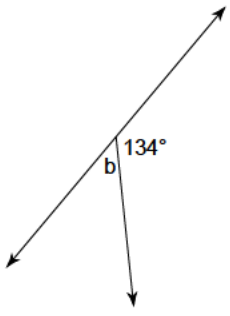


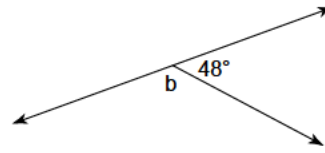
Find the measure of angle b.



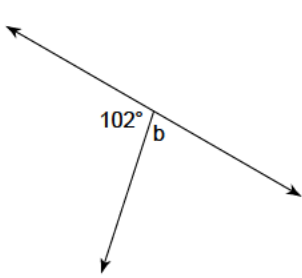
7)



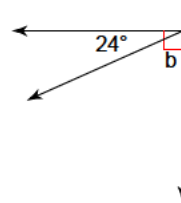
8)



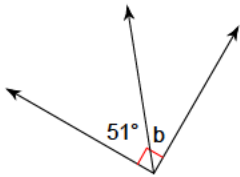
9)



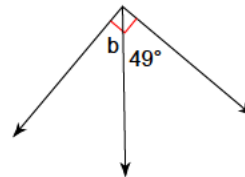
10)



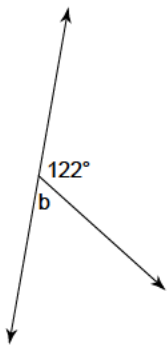
11)



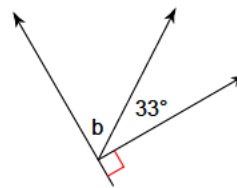
12)



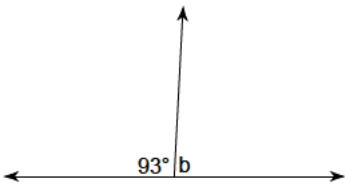
13)



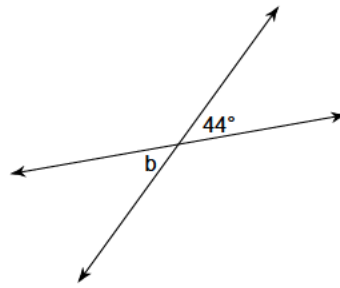
14)



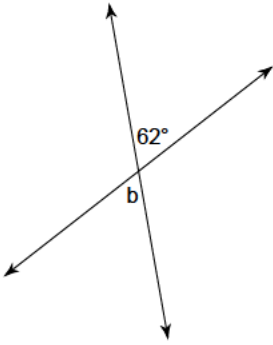
15)



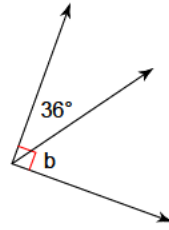
16)



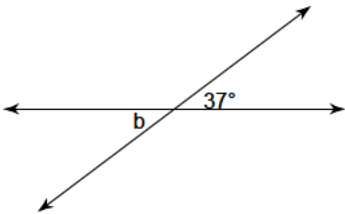
17)



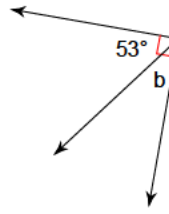
18)



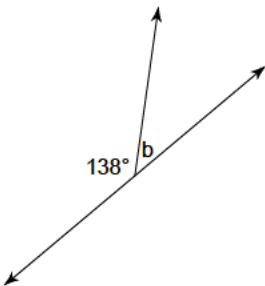
19)



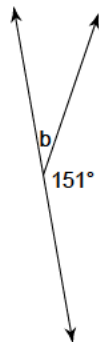
20)



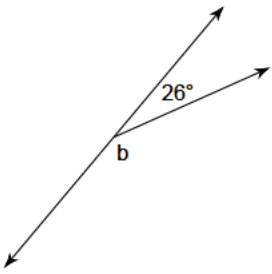
21)



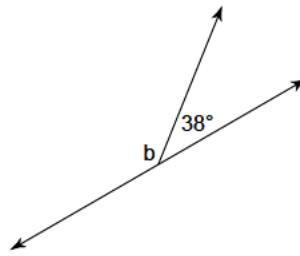
22)



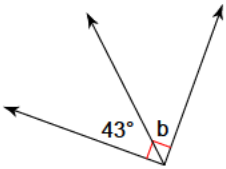
23)



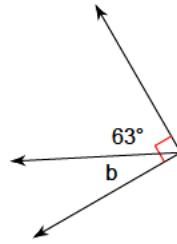
24)



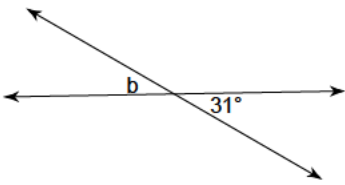
25)



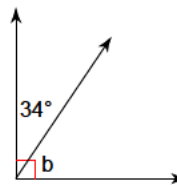
26)



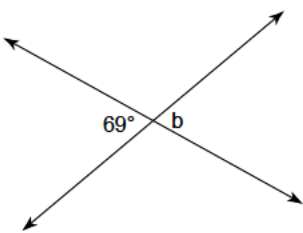
27)



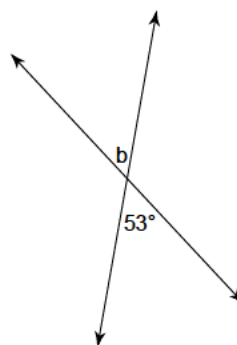
28)



29)



30)



- 1) 25°
- 5) 64°
- 9) 78°
- 13) 58°
- 17) 62°
- 21) 42°
- 25) 47°
- 29) 69°

- 2) 71°
- 6) 31°
- 10) 66°
- 14) 57°
- 18) 54°
- 22) 29°
- 26) 27°
- 30) 53°

- 3) 72°
- 7) 46°
- 11) 39°
- 15) 87°
- 19) 37°
- 23) 154°
- 27) 31°

- 4) 57°
- 8) 132°
- 12) 41°
- 16) 44°
- 20) 37°
- 24) 142°
- 28) 56°